

Naam:

Inoefenen + en - tot 5



Vul in met behulp van afbeeldingen.

$$\begin{array}{c} \text{2} \\ \text{2} \end{array} + \begin{array}{c} \text{3} \\ \text{3} \end{array} = \underline{\text{5}}$$

$$\begin{array}{c} \text{3} \\ \text{3} \end{array} + \begin{array}{c} \text{1} \\ \text{1} \end{array} = \underline{\hspace{2cm}}$$

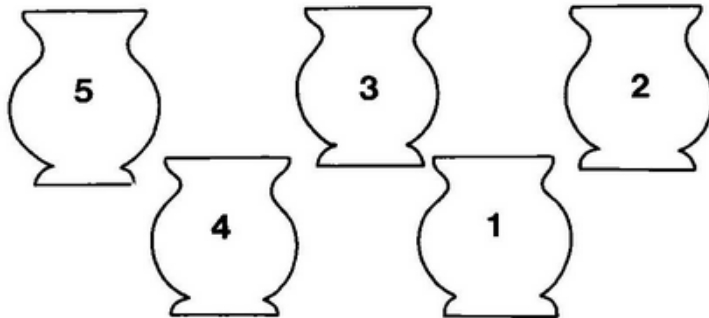

$$\begin{array}{c} \text{2} \\ \text{2} \end{array} + \begin{array}{c} \text{1} \\ \text{1} \end{array} = \underline{\hspace{2cm}}$$

$$\begin{array}{c} \text{4} \\ \text{4} \end{array} + \begin{array}{c} \text{1} \\ \text{1} \end{array} = \underline{\hspace{2cm}}$$


$$\begin{array}{c} \text{4} \\ \text{4} \end{array} + \begin{array}{c} \text{1} \\ \text{1} \end{array} = \underline{\hspace{2cm}}$$




Verbinden.




Los op.



$$2 - 1 = .$$



$$4 - 2 = .$$



$$3 - 1 = .$$



$$5 - 2 = .$$



Los op.



$1 + 3 = \square$

$1 - 0 = \square$

$2 + 2 = \square$

$3 - 3 = \square$

$3 + 1 = \square$

$1 + 3 = \square$

$1 - 1 = \square$

$2 + 3 = \square$

$4 - 3 = \square$

$3 + 2 = \square$

$4 - 1 = \square$

$2 + 3 = \square$

$3 - 0 = \square$

$2 + 1 = \square$

$2 - 2 = \square$

$5 - 3 = \square$

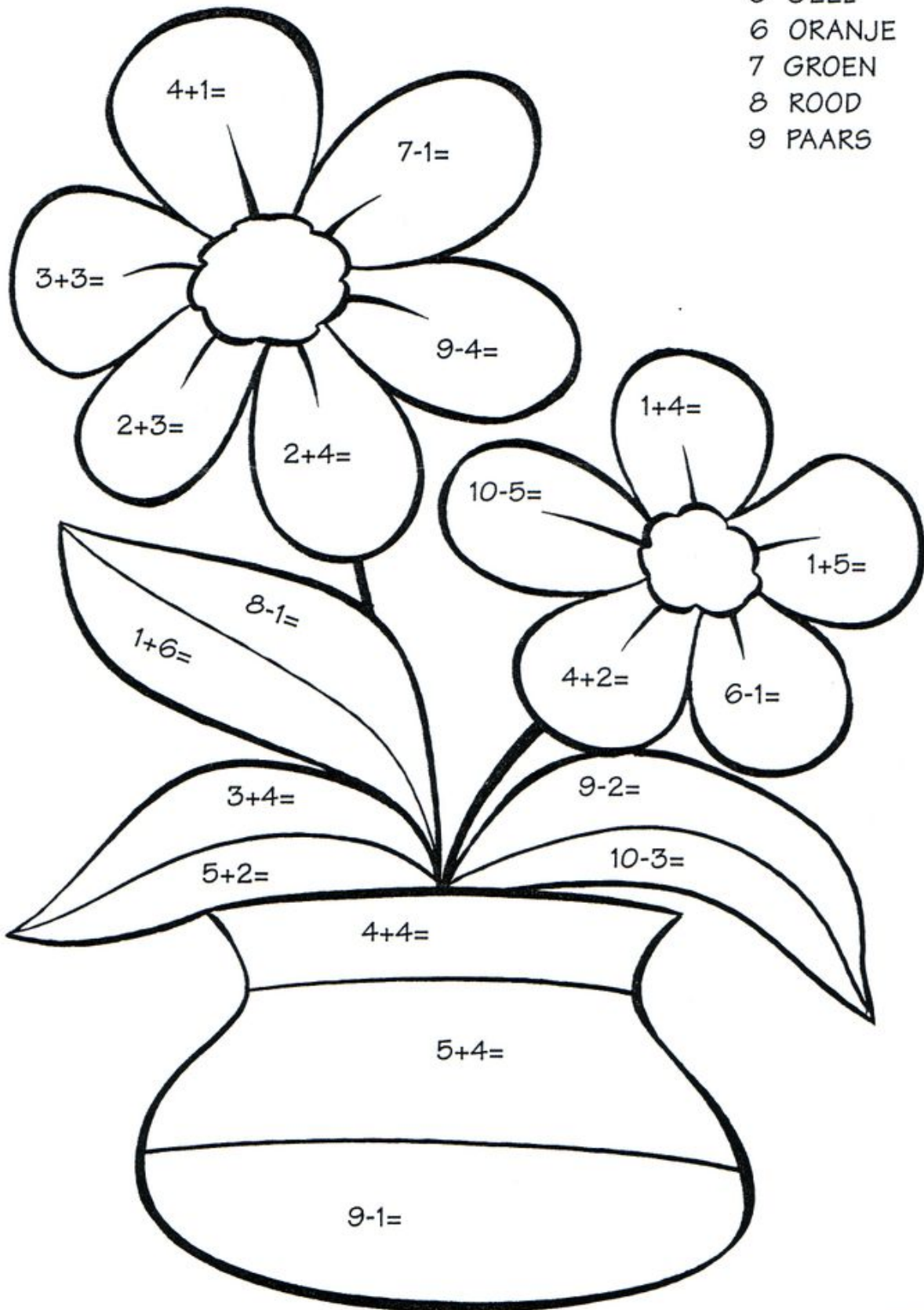
$4 + 1 = \square$

$5 - 5 = \square$

$4 + 1 = \square$

$5 - 2 = \square$

- 5 GEEL
- 6 ORANJE
- 7 GROEN
- 8 ROOD
- 9 PAARS



741240